

Name : _____

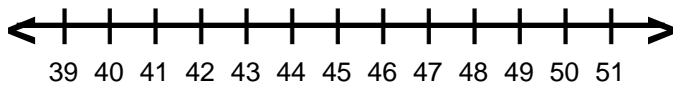
Score : _____

Teacher : _____

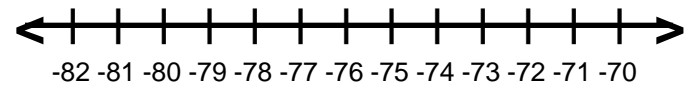
Date : _____

Solve and Graph the Inequalities

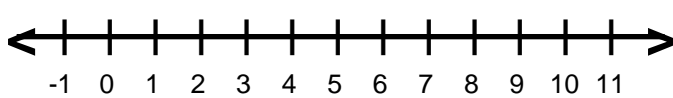
1) $8 \geq \frac{k}{6}$



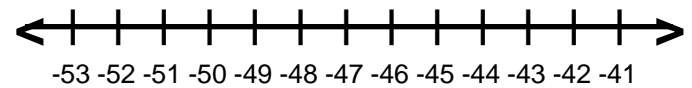
6) $-11 \leq \frac{s}{7}$



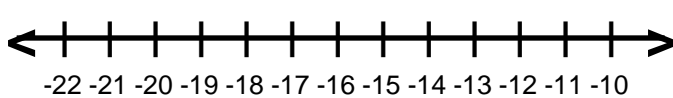
2) $-2r \leq -12$



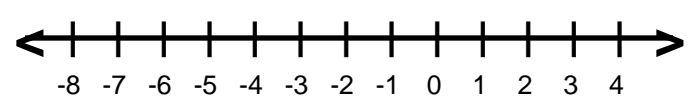
7) $\frac{g}{6} < -8$



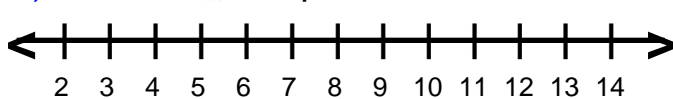
3) $-4q < 48$



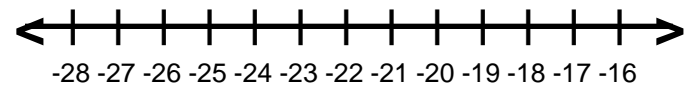
8) $-8 \leq 2x$



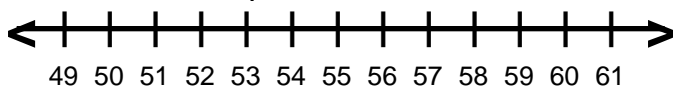
4) $84 > 7p$



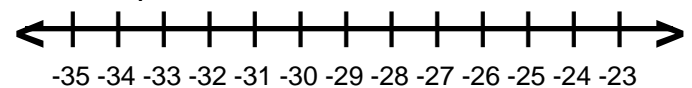
9) $\frac{z}{5} \geq -5$



5) $8 > \frac{c}{7}$



10) $\frac{h}{7} < -4$



Name : _____

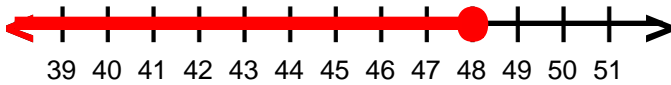
Score : _____

Teacher : _____

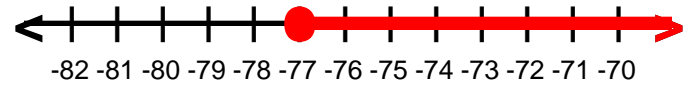
Date : _____

Solve and Graph the Inequalities

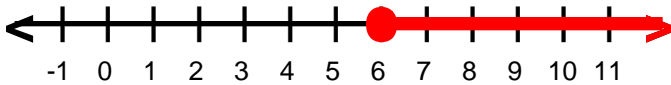
1) $k \leq 48$



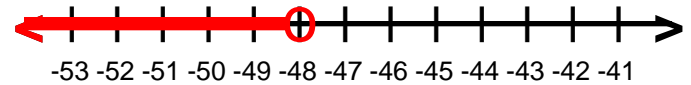
6) $s \geq -77$



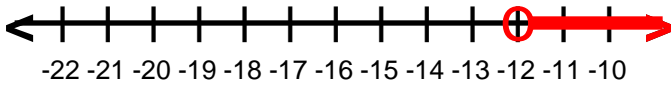
2) $r \geq 6$



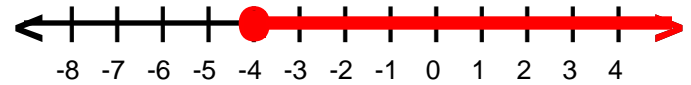
7) $g < -48$



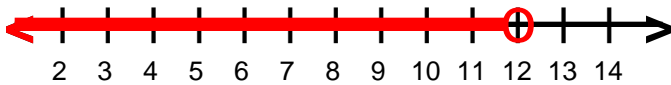
3) $q \geq -12$



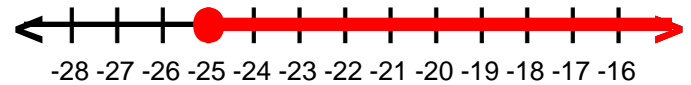
8) $x \geq -4$



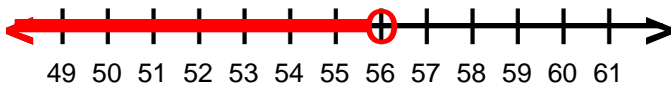
4) $p < 12$



9) $z \geq -25$



5) $c < 56$



10) $h < -28$

