

Name : \_\_\_\_\_

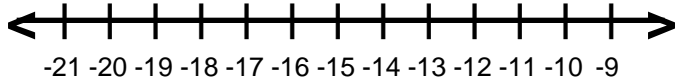
Score : \_\_\_\_\_

Teacher : \_\_\_\_\_

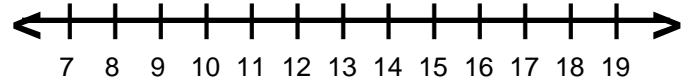
Date : \_\_\_\_\_

## Solve and Graph the Inequalities

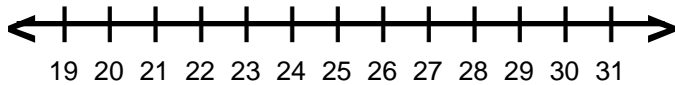
1)  $-7 \leq f + 4$



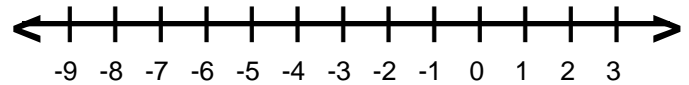
6)  $6 \geq a - 4$



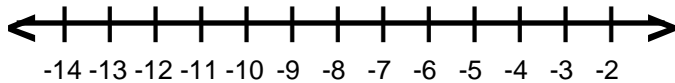
2)  $19 < h - 4$



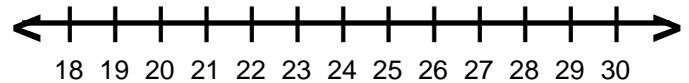
7)  $-8 \geq n - 5$



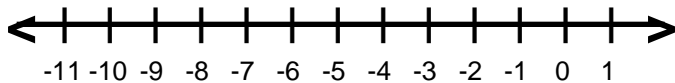
3)  $q - 1 \geq -8$



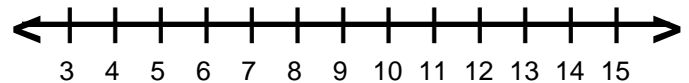
8)  $y - 8 > 17$



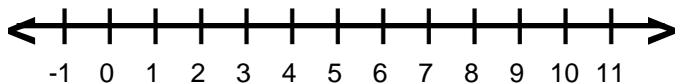
4)  $-12 > -8 + k$



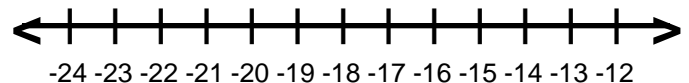
9)  $8 < 1 + g$



5)  $s + 7 \leq 12$



10)  $7 + d < -9$



Name : \_\_\_\_\_

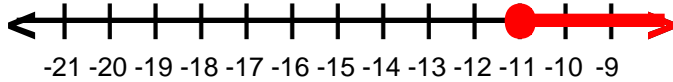
Score : \_\_\_\_\_

Teacher : \_\_\_\_\_

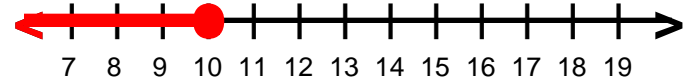
Date : \_\_\_\_\_

## Solve and Graph the Inequalities

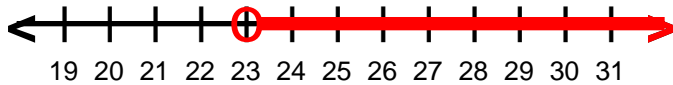
1)  $f \geq -11$



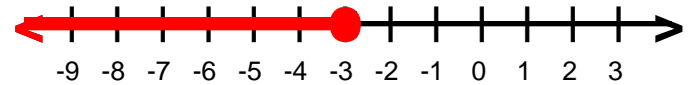
6)  $a \leq 10$



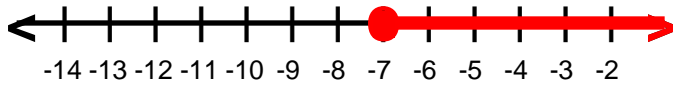
2)  $h > 23$



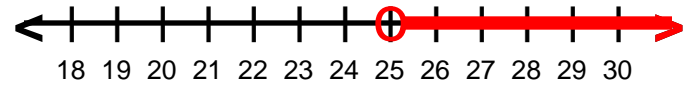
7)  $n \leq -3$



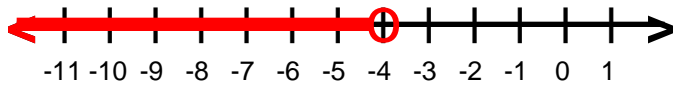
3)  $q \geq -7$



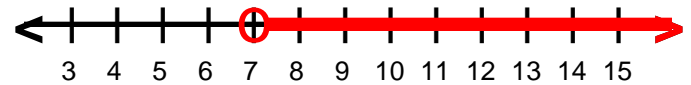
8)  $y \geq 25$



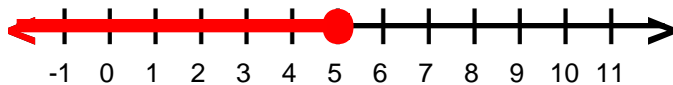
4)  $k < -4$



9)  $g > 7$



5)  $s \leq 5$



10)  $d < -16$

