

Name : _____

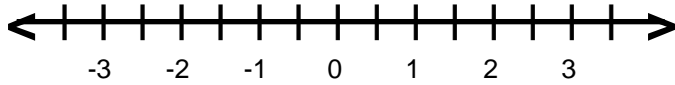
Score : _____

Teacher : _____

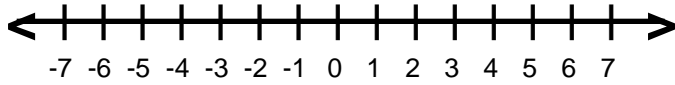
Date : _____

Graphing Inequalities

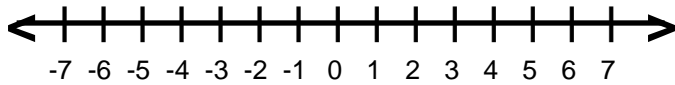
1) $1.5 > -p$



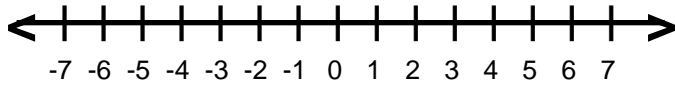
2) $2 > -y$



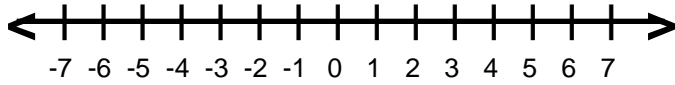
3) $s \leq -2$



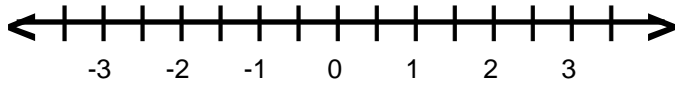
4) $2 \geq n$



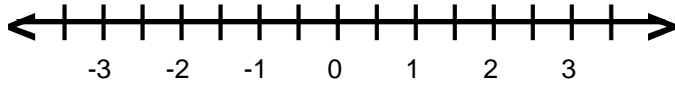
5) $d \leq 5$



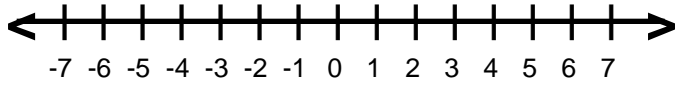
6) $r \geq -2.5$



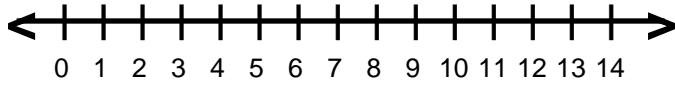
7) $0.5 \geq d$



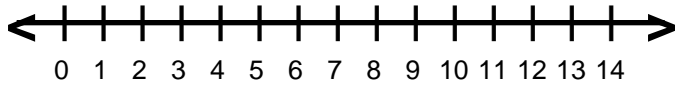
8) $-y \leq 5$



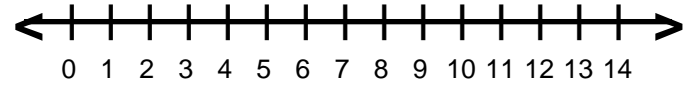
9) $2 \geq v$



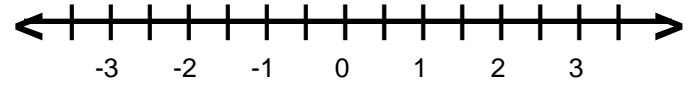
10) $m \leq 1$



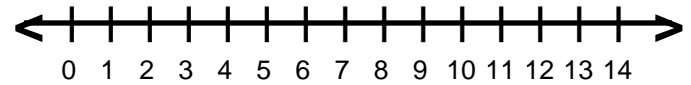
11) $q > 7$



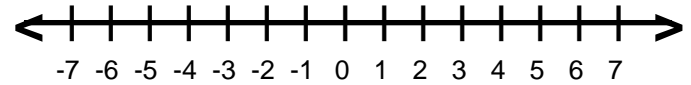
12) $2 > g$



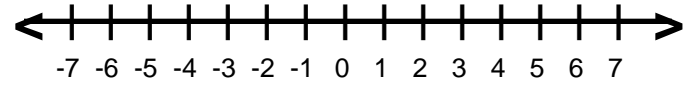
13) $m \leq 3$



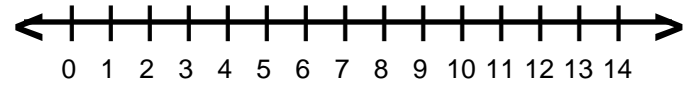
14) $-m \leq -3$



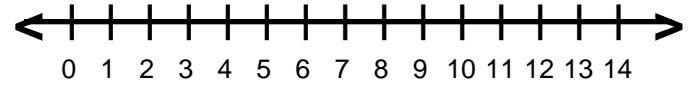
15) $-c \geq -3$



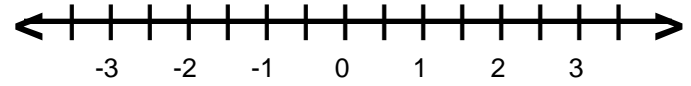
16) $13 < y$



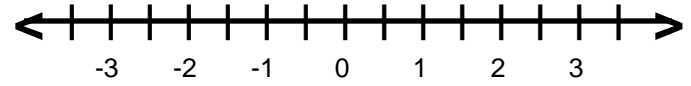
17) $1 < n$



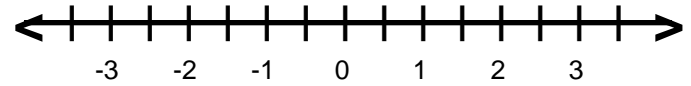
18) $1.5 < -n$



19) $0.5 > h$



20) $h \leq 2$



Name : _____

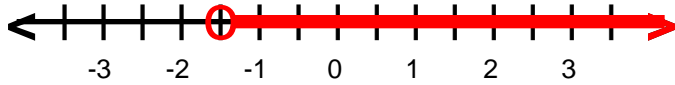
Score : _____

Teacher : _____

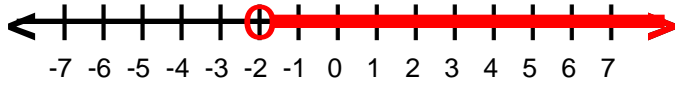
Date : _____

Graphing Inequalities

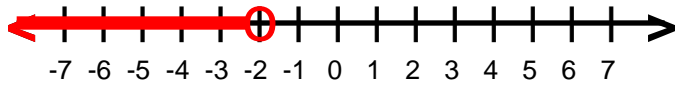
1) $1.5 > -p$ or $-1.5 < p$



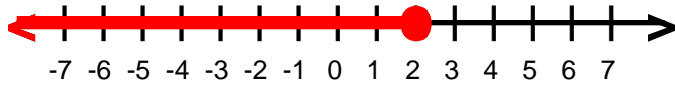
2) $2 > -y$ or $-2 < y$



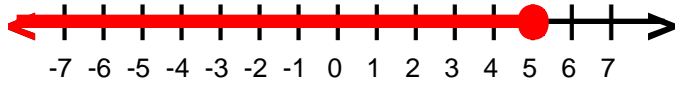
3) $s < -2$



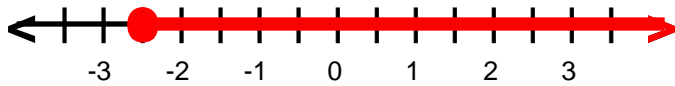
4) $2 \geq n$



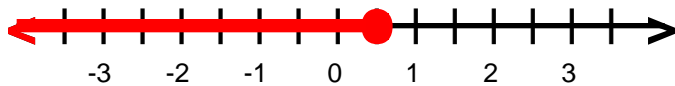
5) $d \leq 5$



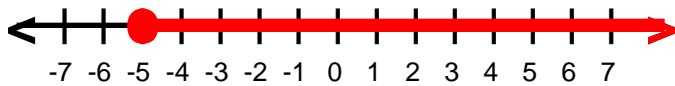
6) $r \geq -2.5$



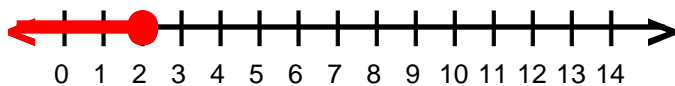
7) $0.5 \geq d$



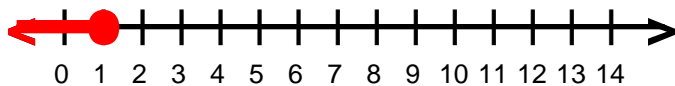
8) $-y \leq 5$ or $y \geq -5$



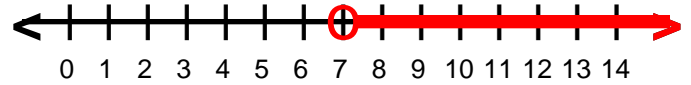
9) $2 \geq v$



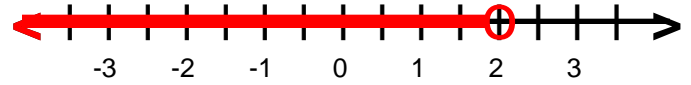
10) $m \leq 1$



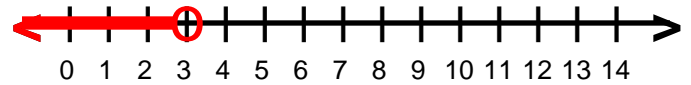
11) $q > 7$



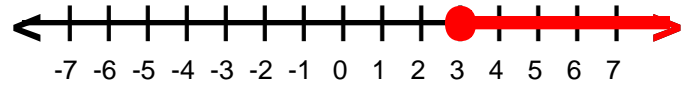
12) $2 > g$



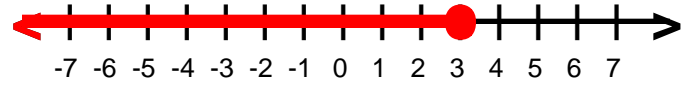
13) $m < 3$



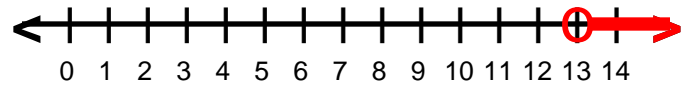
14) $-m \leq -3$ or $m \geq 3$



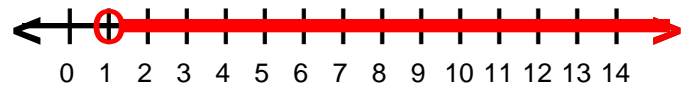
15) $-c \geq -3$ or $c \leq 3$



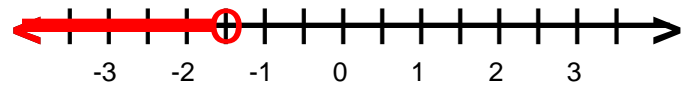
16) $13 < y$



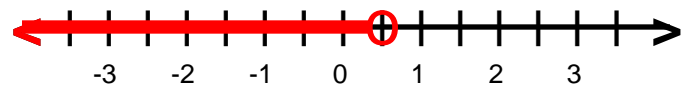
17) $1 < n$



18) $1.5 < -n$ or $-1.5 > n$



19) $0.5 > h$



20) $h \leq 2$

